



Education Pack 1

Key Stage 2



CONTENTS

- 1 Contents
- 2 Player Factfiles
- 3 Spot the Ball
- 4 Maths Challenge A
- 5 Maths Challenge B
- 6 Kit Designer
- 7 Poetry Challenge
- 8 Poetry Challenge
- 9 Spelling Challenge
- 10 Answers



Supported by

**Premier League
Primary
Stars**

PLAYER FACTFILE

This activity is about research! Use the internet to find out key facts about the two Chester FC players below. We've given you the starting letter for each previous club.



NAME: JOEL TAYLOR

POSITION:

DATE OF BIRTH:

PLACE OF BIRTH:

JOINED CHESTER:

PREVIOUS CLUBS:

S
R
H
K



NAME: BRAD JACKSON

POSITION:

DATE OF BIRTH:

PLACE OF BIRTH:

JOINED CHESTER:

PREVIOUS CLUBS:

B
B
S
A



SPOT THE BALL

Can you work out where the football is located in the two photographs below?



MATHS CHALLENGE A

Below are the results from six matches during the 2019/20 season. Look at the scorelines and then answer the four questions.

HOME	SCORE	AWAY
Chester FC	4 - 0	Gloucester City
Curzon Ashton	1 - 3	Chester FC
Chester FC	3 - 3	Leamington
Blyth Spartans	2 - 2	Chester FC
Chester FC	4 - 0	Southport
Guiseley	0 - 1	Chester FC

How many goals were scored by the home teams?

How many goals were scored by the away teams?


How many goals were scored in total in the six matches?






If a team receives three points for a win, one point for a draw and no points for a defeat, how many points did Chester FC gain over the six games?

MATHS CHALLENGE B

Use the player stats to solve these puzzles!




As the manager you can only select five players to complete the starting team. You can only select players who have shirt numbers which are:

-  Multiples of 9
-  Square numbers
-  Prime numbers

Which player is left to sit on the bench?



Can you organise the players into height order from the shortest to the tallest for the team photo?



KIT DESIGNER

Can you design a new kit for Chester FC to wear during the 2020/21 season? Use the template below and be as creative as you can!



POETRY CHALLENGE

We want you to take on the challenge of writing your own poem all about football. This page will help you think about football and what it means to you before creating your poem on the next page.

What is football?

This word cloud includes some key words to help get you started

SOCCKER **M**ATCH **P**LAYER **S**CORE **B**ALL **M**IDFIELD **T**EAMS **F**ANS
STADIUM **R**EFEREE **F**OUL **G**AME **T**RAINING **C**OACH **D**EFENCE
ATTACK **K**ICK **G**RASS **F**OOTBALL **H**EAD **C**HAMPION **W**INNER
GOALKEEPER **P**ASSION **E**XERCISE **T**EAMWORK **D**RIBBLING **P**ENALTY
LOSING **R**IVALRS **P**ITCH **C**UP **C**OMPETITION **C**LUBS

What does football mean to YOU?

This poem is personal so think about your own football experiences, what you love about the game and your hopes for the future both for yourself and the team you support.

What makes a great poem?

Use vocabulary about **football** and **sport**.

Think about the **tone**.

Try to paint a **picture** in the reader's mind with your words.

Use poetic **techniques**: alliteration, simile, metaphor, rhythm, rhyme.

Be **original**. Your ideas are the best.

Top tips!

Keep it simple - your message is the most important thing.

Sometimes the simplest poems are the best.


Write about what you know. Tell it from the heart. Your heart.

Be honest - just be yourself when you're writing.

Have fun! It's not homework so try to just enjoy yourself.

SPELLING CHALLENGE

How many football related words can you make and spell using the letters below? You can only use each letter once!



ANSWERS

Player Factfiles

Joel Taylor

Position: Defender/Left Back

Date of Birth: 24/03/1996

Place of Birth: West Bromwich

Joined Chester: May 2019

Previous Clubs: Stoke, Rochdale, Halesowen, Kidderminster

Brad Jackson

Position: Midfielder/Winger

Date of Birth: 20/10/1996

Place of Birth: Manchester

Joined Chester: December 2018

Previous Clubs: Burnley, Bangor, Southport, Ashton

Spot The Ball

Photograph 1: B

Photograph 2: B

Maths Challenge A

Question 1: 14 goals

Question 2: 9 goals

Question 3: 23 goals

Question 4: 14 points

Maths Challenge B

Question 1: Boly 15 (Moura 27 is a multiple of 9, Doucoure 16 and Van Dijk 4 are square numbers, Pepe 19 and Tomori 29 are prime numbers)

Question 2: Moura 27, Pepe 19, Doucoure 16, Tomori 29, Van Dijk 4 & Boly 15

Spelling Challenge

shirt

gloves

player

bench

points

result

bounce

mascot

trophy

ground

stadium

penalty

game

champion

transfer

striker